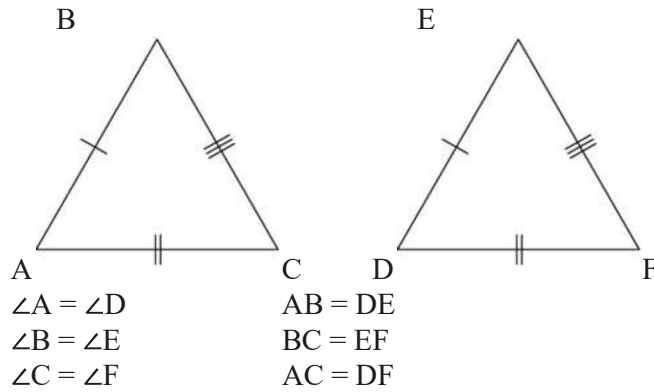


## Chapter 6: Congruence and Similarity

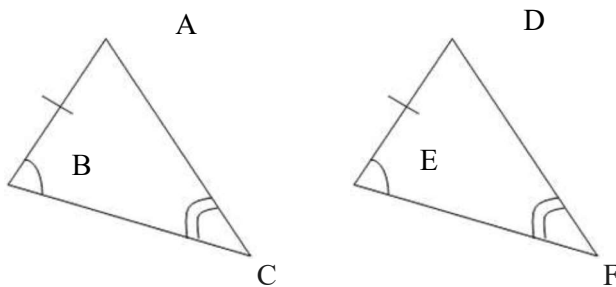
### Tests of Congruency

#### 1. Side – Side – Side



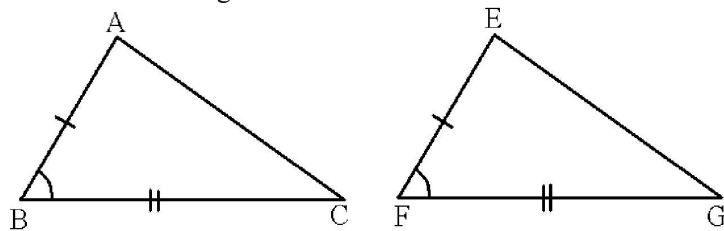
So  $\triangle ABC \cong \triangle DEF$  (SSS Rule)

#### 2. Angle – Side – Angle



Let  $BC = EF$ ,  $\angle B = \angle E$ ,  $AB = DE$ ,  $\angle C = \angle F$   
 So  $\triangle ABC \cong \triangle DEF$  (ASA Rule)

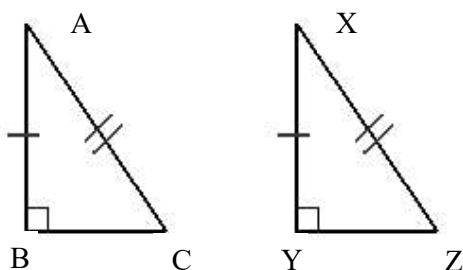
#### 3. Side – Angle – Side



$AB = EF$   
 $\angle ABC = \angle EFG$   
 $BC = FG$

So  $\triangle ABC \cong \triangle EFG$  (SAS Rule)

#### 4. Right angled – Hypotenuse – Side



$$\angle B = \angle Y = 90^\circ$$

$$AB = XY$$

$$AC = XZ$$

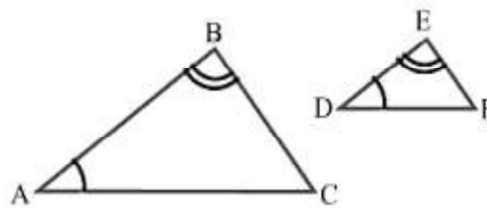
So  $\triangle ABC \cong \triangle XYZ$  (SAS Rule)

#### Tests for Similarity

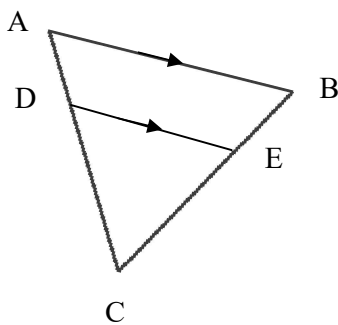
$\triangle ABC$  and  $\triangle DEF$  are similar if,

- 2 pairs of corresponding angles are equal

i.e.  $\angle A = \angle D, \angle B = \angle E$  (AA)



Example



In  $\triangle ABC$  and  $\triangle DEC$ ,

$$\angle ACB = \angle DCE \quad (\text{common})$$

$$\angle ABC = \angle DEC \quad (\text{corresponding angles})$$

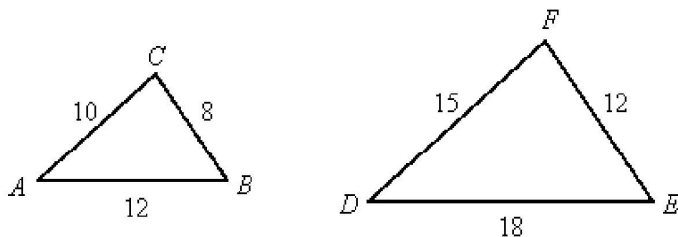
$$\angle BAC = \angle EDC \quad (\text{corresponding angles})$$

$\therefore \triangle ABC$  is similar to  $\triangle DEC$  (AA Similarity)

- 3 pairs of corresponding sides are in the same ratio

i.e.  $\frac{AB}{DE} = \frac{BC}{EF} = \frac{AC}{DF}$  (SSS)

Example



In  $\triangle ABC$  and  $\triangle DEF$ ,

$$\frac{AB}{DE} = \frac{10}{15} = \frac{2}{3}, \quad \frac{BC}{EF} = \frac{8}{12} = \frac{2}{3}, \quad \frac{AC}{DF} = \frac{12}{18} = \frac{2}{3}$$


$\therefore \triangle ABC$  is similar to  $\triangle DEF$  (SSS Similarity)

### Ratio of Areas of Similar Figures

If 2 figures are similar, then the ratio of their areas is given by

$$\frac{A_1}{A_2} = \left( \frac{h_1}{h_2} \right)^2 = \left( \frac{l_1}{l_2} \right)^2$$

### Ratio of Volumes of Similar Solids



For 2 geometrically similar solids,

the ratio of their length or heights are  $l_1 : l_2$  and  $h_1 : h_2$

then the ratio of their areas is given by  $\frac{A_1}{A_2} = \left( \frac{h_1}{h_2} \right)^2 = \left( \frac{l_1}{l_2} \right)^2$

and the ratio of their volumes is given by  $\frac{V_1}{V_2} = \left( \frac{h_1}{h_2} \right)^3 = \left( \frac{l_1}{l_2} \right)^3$